



Knowledge Partner



Amaravati | Amritapuri | Bengaluru | Chennai  
Coimbatore | Faridabad

**IDENTIFYING  
THE RIGHT CAREER**

**DO NOT OPEN THIS BOOKLET UNTIL ASKED TO DO SO**

Roll No.:

Maximum Marks: 180

--	--	--	--	--	--

Maximum Time: 90 (+30) minutes

CLASS

11

COMMERCE

**INSTRUCTIONS FOR CANDIDATE**

**General Instructions for Candidates**

1. Read all instructions carefully. This Question Paper comprises of two sections:  
Section I: Multiple Intelligence Test (40 questions) [20 minutes]  
Section II: Scholastic Aptitude Test (60 questions) [90 minutes]
2. Write Your Roll Number on the box provided above and in OMR Sheet.
3. 10 Min will be provided to fill the OMR Sheet before the start of Exam.
4. Students must fill all the personal details carefully in the OMR Sheet
5. Read all the instruction on OMR sheet as well before start of exam.

**Instructions for Section I**

1. Students will be allocated maximum of 20 min to complete this section.
2. Questions in Section I do not carry any marks.
3. Answering all questions in Section I is compulsory.
4. You need to answer all the question in this section, truthfully based on your preference. fake responses will lead to misinterpretation of your intelligence type.
5. Multiple Intelligence Report shall be provided on the basis of Section I.

**Instructions for Section II**

1. Students will be allocated maximum of 90 min to complete this section.
2. Question in Section II carry 3 Marks Each.
3. Answering all questions is not compulsory in Section II.
4. For each correct answer student will be awarded 3 marks and for each incorrect answers, 1 mark would be deducted.
5. For unanswered questions, no mark would be awarded or deducted.
6. Rank will be provided on the basis of Section II.
7. Use of calculator, mobile phones or log tables is not permitted.
8. There is only ONE correct answer. Choose only ONE option for an answer.
9. Fill the required details clearly on Answer (OMR) Sheet & do not overwrite.
10. Rough work should be done in the blank space provided on the last page.
11. Return both Answer & Question sheet to the invigilator at the end of the exam.
12. Any use of unfair means in the test will result in termination of the candidate.

**Instructions for filling OMR Sheet**

1. Fill the OMR sheet using HB Pencil only.
2. To mark your choice of answers, Darken the circles completely in the Answer (OMR) Sheet corresponding to the question you are answering.
3. Darken only one circle, and keep rest of the sheet clean.
4. In case if wrong circle is darkened, completely erase the markings.
5. Ensure all personal details are filled in OMR Sheet before starting the exam.

**DO NOT OPEN THIS BOOKLET UNTIL ASKED TO DO SO**

## MULTIPLE INTELLIGENCE TEST

## SECTION-II

## APTITUDE TEST

▶ LOGICAL REASONING

▶ ACCOUNTANCY

▶ BUSINESS STUDIES

▶ ECONOMICS

## MULTIPLE INTELLIGENCE TEST

Section-I: Multiple Intelligence Test

**Directions : (1 to 35) These are general statements.****You have to mark options A, B, C or D in the OMR sheet as per your preference.****A = Mostly Disagree****B = Slightly Disagree****C = Slightly Agree****D = Mostly Agree**

1. I enjoy word games like Scrabble and crossword puzzles.
2. I can easily add numbers in my head.
3. People say I have a good singing voice.
4. I like to listen to someone read a story aloud.
5. I like to spend time alone.
6. I use my hands a lot when talking or describing something.
7. I prefer books that have lots of pictures.
8. The best thing about school is getting to be with my friends all day.
9. I know a song after hearing it only once or twice.
10. I enjoy doing experiments.
11. It's easy for me to write 150 words or more for an essay.
12. I enjoy board games such as chess or checkers.
13. I study better if music is playing.
14. I like to act things out.
15. I enjoy making things with clay or play dough.
16. I have more than one favorite teacher.
17. I like school activities to follow the same order each day.
18. I listen to music on radio, cassettes, or CD's often.
19. I doodle or draw often during class.

20. Reading charts, maps, and graphs is easy.

21. I know what I want to be when I grow up and what I need to do to become it.

22. I have a secret place.

23. English and Social Studies are my best subjects.

24. I automatically tap my feet or hands along with music.

25. It's easy for me to remember names.

26. My friends ask me to help them with their problems.

27. I like to watch TV or movies.

28. I love to run, jump, or dance.

29. Math and Science are my best subjects.

30. I like to play games with other people.

31. I like art activities.

32. I have 2 or more "best" friends.

33. Adults say I'm stubborn or strong-willed.

34. It's hard to sit still for long periods of time.

35. I like to do my work alone.

**Directions : (36 to 40) These are general statements.****You have to mark options A, B, C or D in the OMR sheet as per your preference.****A = Very Frequently****B = Occasionally****C = Rarely****D = Very Rarely**

36. I use computer.

37. I use internet for studies.

38. I play games on computer.

39. I watch movies on computer.

40. I wish to use computers for overall knowledge enhancement.

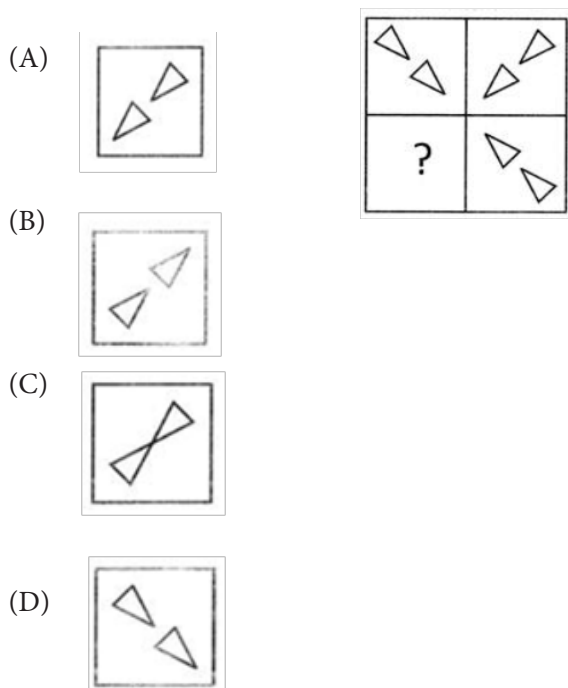
## SECTION-II: SCHOLASTIC APTITUDE TEST

### QUESTIONS 1 TO 15: LOGICAL REASONING

1. Direction: In each of the following questions four words / four letter have been given of which three are alike in same way and one is different choose out the ODD one.

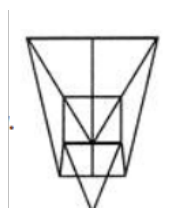
- (A) Leucoderma
- (B) Rheumatism
- (C) Dysentery
- (D) Diabetes

2. Directions: In each of the following questions, one problem figure is given. This is followed by four answer figures, in problem some blank is left which is shown by question mark in answer figures there is only one figure which is placed in place of question mark, it will complete pattern. Find the figure which completes the pattern. Which one of the following alternative will complete the figure pattern?

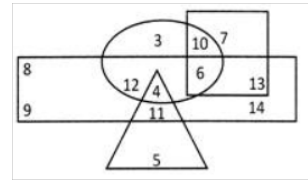


3. How many triangles are there in this figure?

- (A) 16
- (B) 17
- (C) 18
- (D) 19



4. Directions: The following question are based on the diagram given below:



(i)	Rectangle represents males
(ii)	Triangles represents educated
(iii)	Circle represents urban
(iv)	Square represents urban

- (A) 4
- (B) 5
- (C) 9
- (D) 11

5. Direction: Below in each question, five words are given. Which of them will come at the third position if all of them are arranged alphabetically as in a dictionary?

- (A) Amared
- (B) Altitude
- (C) Ambience
- (D) Amature

6. Directions: In each of the following questions, select the related letter / word in number from the given alternatives. 13 : 19 :: 21 : ?

- (A) 41
- (B) 81
- (C) 141
- (D) 14

7. Directions: In each of the following questions, select the related letter / word in number from the given alternatives. Eagle : Swoops :: Duck : ?

- (A) waddles
- (B) floats
- (C) swims
- (D) flits

8. If in a certain code, LUTE is written as MUTE and FATE is written as GATE, then how will BLUE be written in that code?

- (A) CLUE
- (B) GLUE
- (C) FLUE
- (D) SLUE

9. Directions: The two expression on either side of the sign (=) will have the same value if two terms on either side or on the same side are interchanged. The correct terms to be inter-changed have been given as one of the four alternatives under each expressions. Find the correct alternative. Which of the following meanings of the arithmetical signs will yield the value 'zero' for the expression given below?  $200 \times 100 + 300 \times 200 - 10 \div 2 + 40$

- (A) + means -, - means  $\times$ ,  $\times$  means +, + means +
- (B) + means -, - means -,  $\times$  means +,  $\div$  means  $\times$
- (C) + means  $\times$ , - means -,  $\times$  means -,  $\times$  means - / - means +
- (D) + means  $\div$ , - means +,  $\times$  means -,  $\div$  means  $\times$

10. Direction: Read the formation carefully and answer the questions based on it. Six persons are sitting in a circle. A is facing B. B is to the right of E and left of C. C is to the left of D. F is to the right of A. Now, D exchanges his seat with F and E with B. Who will be sitting to the left of D?

- (A) B
- (B) D
- (C) E
- (D) A

11. Directions: There are six person A, B, C, D, E and F. B is the sister of E's husband. D is the father of A and grandfather of F. There are two fathers, three brothers and a mother in the group. How many male members are there in the group?

- (A) One
- (B) Two
- (C) Three
- (D) Four

12. Sanjeev walks 10 metres towards the South. Turning to the left, he walks 20 metres and then moves to his right. After moving a distance of 20 metres, he turns to the right and walks 20 metres. Finally, he turns to the right and moves a distance of 10 metres. How and in which direction is he from the starting point?

- (A) 10 metres North
- (B) 20 meter South
- (C) 20 metres North
- (D) 10 metres South

13. An accurate clock shows 8 o'clock in the morning. By how many degrees, the hour hand would have rotated when the clock shows 2 o'clock in the afternoon?

- (A)  $144^{\circ}$
- (B)  $150^{\circ}$
- (C)  $168^{\circ}$
- (D)  $180^{\circ}$

14. Reaching the place of meeting on Tuesday 15 minutes before 08:30 hours, Anju found herself half an hour earlier than the man who was 40 minute late. What was the scheduled time of the meeting?

- (A) 8:00 hrs
- (B) 8:05 hrs
- (C) 8:15 hrs
- (D) 8:45 hrs

15. Directions: In each of the following questions, select the related letter / word in number from the given alternatives. Grenade : Gun :: ?

- (A) Sister: Brother
- (B) Father: Mother
- (C) Man : Woman
- (D) Head : Brain

## QUESTIONS 16 TO 30 : ACCOUNTANCY

16. A person who writes out the order to pay is called?

- (A) Drawer
- (B) Acceptor
- (C) Payee
- (D) Drawee

17. While calculating the due date of the bill, how many days are added to the period of the bill :

- (A) 4 days
- (B) 3 days
- (C) 5 days
- (D) Neither of these

18. Accounts which are maintained under single entry system-

- (A) Personal accounts
- (B) Impersonal accounts
- (C) (a) & (b) both
- (D) None of these.

19. Software are::

- (A) 5 Types
- (B) 3 Types
- (C) 4 Types
- (D) 5 Types

20. FarkhandaJabeen Ltd. receives a check for Rs. 100 records it in cash book and deposits it on the same day. A statement sent by the bank that day does not show this Rs. 100. How is this shown on the bank reconciliation statement?

- (A) As an uncredited deposits added to the bank statement balance
- (B) As an uncredited deposits deducted from the bank statement balance
- (C) As an Unpresented check added to the bank statement balance
- (D) As an Unpresented check deducted from the bank statement balance

21. What is the advantages of tailor-made software.

- (A) These are ready made softwares
- (B) Low cost
- (C) High secrecy of data
- (D) None of the above

22. Under Reducing Balance Method, depreciation to be charged :

- (A) Scrap Value
- (B) None of these
- (C) Real Value
- (D) Original value

23. Drawing is deducted from:

- (A) Sales
- (B) Purchase
- (C) Returns outward
- (D) Capital

24. Prepaid expenses are shown in-

- (A) Liability side
- (B) Asset side
- (C) Assets or Liability side
- (D) None of these.

25. The basic accounting postulates are denoted by -

- (A) Concepts
- (B) Book - keeping
- (C) Accounting standards
- (D) None of these.

26. The first book of original entry is-

- (A) Journal
- (B) Ledger
- (C) Trial Balance
- (D) None of these.

27. Return of goods by a customer is recorded in-

- (A) Purchase book
- (B) Sales book
- (C) Sales return book
- (D) Purchase return book

28. The sum of Liabilities and Capital is-

- (A) Expense
- (B) Income
- (C) Drawings
- (D) Assets.

29. Of the two sides of Trial balance does not tally, which Account is opened –

- (A) Suspense Account
- (B) Personal Account
- (C) Real Account
- (D) None of these.

30. A bill of exchange can not be

- (A) Endorsed
- (B) Accepted
- (C) Refused
- (D) Crossed

## QUESTIONS 31 TO 45 : BUSINESS STUDIES

31. Which is considered as the cheapest means of transportation

- (A) Air
- (B) Road
- (C) Water
- (D) Railway

32. Which is the central Bank of India

- (A) Central Bank
- (B) State Bank of India
- (C) Bank of India
- (D) Reserve Bank of India

33. Which method is very popular for making online transactions?

- (A) Credit Card
- (B) All of these
- (C) Net banking
- (D) Debit Card

34. Stages in the formation of a public company are in the following order

- (A) Promotion, Commencement of Business, Incorporation, Capital Subscription
- (B) Incorporation, Capital Subscription, Commencement of Business, Promotion
- (C) Promotion, Incorporation, Capital Subscription, Commencement of Business
- (D) Capital Subscription, Promotion, Incorporation, Commencement of Business

35. The address of the registered office of the company must be notified to the registrar within \_\_\_\_\_ days of registration, if it is not done at the time of incorporation

- (A) 15
- (B) 30
- (C) 60
- (D) 45

36. A prospectus is issued by

- (A) A private company
- (B) A public company seeking investment from public
- (C) A public enterprise
- (D) A public company

37. If the proposed nominal capital is more than 25 lakh at the time of incorporation then the company needs to submit \_\_\_\_\_ along with the application

- (A) statement of capital
- (B) certificate of incorporation
- (C) certificate of capital
- (D) certificate of incorporation

38. Which of the following is probably the most important reason for incorporating?

- (A) limited liability of shareholders.
- (B) more money for investment.
- (C) increased flexibility.
- (D) shared management.

39. An agent is appointed by the \_\_\_\_\_

- (A) Principal
- (B) Manufacturer
- (C) Wholesaler
- (D) Retailer

40. .... is the payment method most often used in International Trade which offers the exporter best assurance of being paid for the products sold internationally.

- (A) Bill of Lading
- (B) Letter of Credit
- (C) Open Account
- (D) Drafts

41. Which one of the following modes of entry requires higher level of risks?

- (A) Licensing
- (B) Franchising
- (C) Contract manufacturing
- (D) Joint venture

42. Which one of the following is not a document related to fulfill the customs formalities

- (A) Shipping bill
- (B) Export license
- (C) Letter of insurance
- (D) Proforma invoice

43. The industries which provide support services to other industries are known as

- (A) Primary industries
- (B) Secondary industries

(C) Commercial industries

(D) Tertiary industries

44. Centralised control in MNC's implies control exercised by

- (A) Branches
- (B) Subsidiaries
- (C) Headquarters
- (D) Parliament

45. The maturity period of a commercial paper usually ranges from

- (A) 20 to 40 days
- (B) 60 to 90 days
- (C) 120 to 365 days
- (D) 90 to 364 days

## QUESTIONS 46 TO 60 : ECONOMICS

46. Which of the following is studied under Micro Economics ?

- (A) Individual unit
- (B) Economic Aggregate
- (C) National Income
- (D) None of these

47. Which of the following statement is true?

- (A) Human wants are infinite
- (B) Resources are limited
- (C) Scarcity problem gives birth to choice .
- (D) All of these

48. Which of the following is the feature of pure competition ?

- (A) Perfect knowledge of the market
- (B) Perfect mobility of factors
- (C) Homogeneity by products
- (D) All the above

49. Who gave the concept of 'Time Element' in price determination process ?

- (A) Ricardo
- (B) Walras
- (C) Marshall
- (D) J. K. Mehta

50. In very short period, supply will be:

- (A) Perfectly elastic
- (B) Perfectly Inelastic
- (C) Elastic
- (D) None of these

51. Market which has two firms is known as

- (A) Duopoly
- (B) Monopolistic Competition
- (C) Oligopoly
- (D) None of These

52. Who gave the cardinal concept of utility?

- (A) Marshall
- (B) Pigou
- (C) Hicks
- (D) Samuelson

53. When TU becomes maximum, MU is:

- (A) Positive
- (B) Negative
- (C) Zero
- (D) None of these

54. Marshall has given the law of Equimarginal utility related:

- (A) Related to goods
- (B) Related to money
- (C) In relation to both
- (D) None of these.

55. The demand curve of a good shifts from DD' to dd  
(A) fall in the price of the goods  
(B) rise in the price of the goods  
(C) rise in the price of substitute goods  
(D) rise in the price of complementary goods

56. Which statement of the following is true ?  
(A)  $AC = TFC - TVC$   
(B)  $AC = AFC + TVC$   
(C)  $AC = TFC + AVC$   
(D)  $AC = AFC + AVC$

57. Which element is essential for demand ?  
(A) Desire to consume  
(B) Availability of adequate resources  
(C) Willingness to consume  
(D) All of these

58. Where is the headquarters of WTO located?  
(A) Italy (B) Geneva  
(C) New York (D) Washington

59. The slope of the demand Curve of a normal goods is::  
(A) Negative  
(B) Positive  
(C) Zero  
(D) Undefined

60. With which method, elasticity of demand is measured?  
(A) Total Expenditure Method  
(B) Percentage or Proportionate Method  
(C) Point Method  
(D) All of these

---

**ROUGH WORK**



# ROUGH WORK



Knowledge Partner



Organized by



Managed by



Indian Intelligence Test, Jagran Prakashan Ltd., Dainik Jagran - inext, Jagran Building - 2, Sarvodaya Nagar, Kanpur- 208005, Uttar Pradesh.  
Helpline Number : 7311192685, For latest updates & information, please visit [www.indianintelligencetest.com](http://www.indianintelligencetest.com)